

Name:

Chapter 9: The Human Body

1. _____ is not used to make houses

2. _____ is used in windows to let sunlight in.

4. The skin, eyes and lungs are examples of _____.

5. The _____ pull the bones to make them move.

7. Air enters lungs through the _____.

8. _____ plant stores its food in stems.

9. The leaves use _____ to make food.

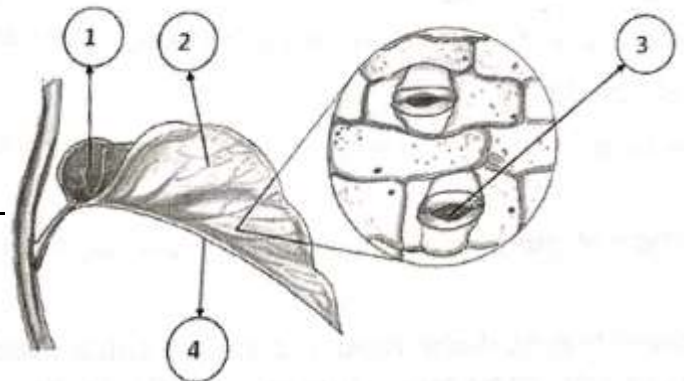
10. _____ help to make seeds for the plant.

1) The flat, broad part of the leaf: _____

- 2) Thin tubes running across the leaf: _____

- 3) Tiny holes through which air enters: _____

- 4) The main tube connected to the thin tubes
on the leaf.:



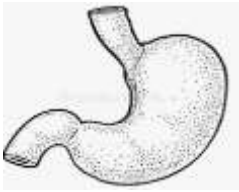
III. Circle the odd one out in each set:

- | | | | |
|------------|---------|--------|-------|
| 1) Head | stomach | brain | think |
| 2) Lung | head | breath | chest |
| 3) Stomach | food | pump | eat |
| 4) Swallow | heart | blood | pump |

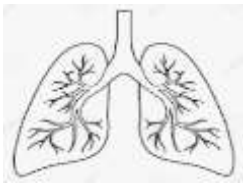
IV. Match the pictures of the organs with their names:



Lungs



brain



heart



stomach

V. Fill in the blanks with the words in the help box:

Germ	fresh	sunlight	covered	spaces
------	-------	----------	---------	--------

There are several things that a good house must have. A house must have proper windows to let in the _____ and _____ air in, as sunlight kills _____. There should be a lot of open _____ to get sunlight and fresh air. Dustbins should be kept _____ to keep away _____.

VI. Name them:

- 1) Plants that need support to climb. _____
- 2) Tiny openings found on the lower side of the leaf. _____
- 3) The part of a plant changed from a flower and having seeds inside it. _____
- 4) The substance that gives leaves the green color. _____
- 5) The hard and strong stem of a big tree. _____

VII. Mark T for true and F for false statement:

- 1) The doors and window frames of a house are made of glass. []
- 2) The lungs pump blood to all parts of the body. []
- 3) Garbage should be thrown into open places. []
- 4) Mosquitoes spread diseases. []
- 5) The food that cannot be digested goes into large intestine. []

VIII. Write the part of the plant that we eat of the following.

carrot	onion	beetroot	radish	sugarcane
garlic	potato	ginger	potato	ginger

ROOT OF A PLANT	STEM OF A PLANT	LEAF OF A PLANT